



# Dinosaur Music Intervals

How many dinosaur intervals can you complete? Identify the size of each interval and write your answers below. Ex. 5th




Musical staff with treble clef and five measures of intervals. Below each measure is a blank line for the answer.

_____	_____	_____	_____	_____
-------	-------	-------	-------	-------




Musical staff with bass clef and five measures of intervals. Below each measure is a blank line for the answer.

_____	_____	_____	_____	_____
-------	-------	-------	-------	-------



Musical staff with treble clef and five measures of intervals. Below each measure is a blank line for the answer.

_____	_____	_____	_____	_____
-------	-------	-------	-------	-------



Musical staff with bass clef and five measures of intervals. Below each measure is a blank line for the answer.

_____	_____	_____	_____	_____
-------	-------	-------	-------	-------